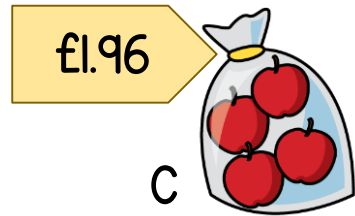
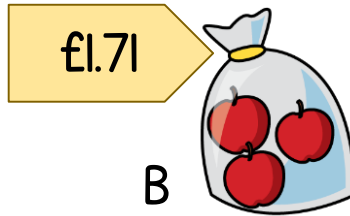
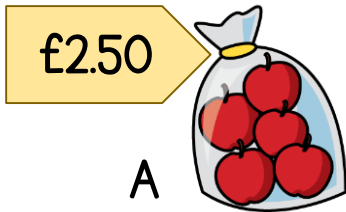


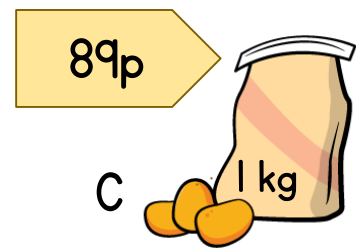
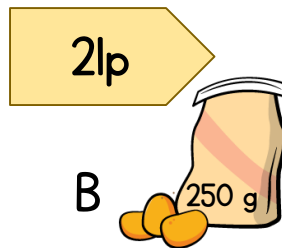
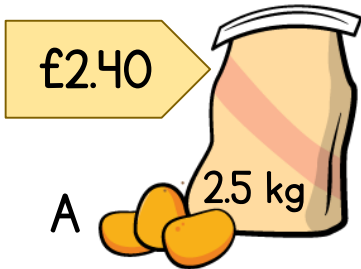
1

Which option is better value for money? C - 49p each



2

Which option is better value for money? B - 84p per kg



Best Value

3

Which option is better value for money? B - £2.37 for 6

60p each



A

30% off
total cost

79p each



B

Buy one, get
one free

52p each



C

Buy 2, get a
third $\frac{1}{2}$ price

I need 6 pineapples



4

Option B is the worst value for money.

Option C is the best value for money.

What could be the cost of Option A?

Between 87p
and 90p

?

A



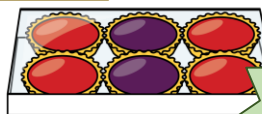
£2.73

B



£6.88

C



25% off